

SUMMER 2020 ASSIGNMENT – INCOMING ALGEBRA I

Show work for credit.

Name: _____

1. $(-4) + (-5) =$

2. $6 - (-3) + 1 =$

3. $3(2 + n) - 2(n + 1) =$

4. What is 6% of 120.

5. Jonah's restaurant bill comes to \$60, and he leaves a 10% tip. How much does he pay in total?

6. Alicia borrowed \$3,000 from the bank at a rate of 12% simple interest per year. How much **interest** does she pay in one year?

7. Niko finds a toy train set on sale for 20% off the original price of \$35. He does not need to pay any sales tax. What is the total amount Nico must pay for the train set?

8. Michele purchased 25 sandwiches for a party in September. She purchased 40 sandwiches for another party in October. What is the percent increase in the number of sandwiches purchased in October compared to September?

9. Write an algebraic expression for the following statements:
a) 5 more than two-thirds of a number.

SUMMER 2020 ASSIGNMENT – INCOMING ALGEBRA I

b) The product of 7 and a number, reduced by 9.

10. Round 5.2814 to the nearest hundredth.

11. In a proportional relationship shown in the table below:

Dollars earned (\$)	30	75		90
Hours worked	2	5	3.5	

a) Write the algebraic relationship between the dollars earned and hours worked.

b) How much is earned by working 3.5 hours?

c) How many hours need to be worked to earn \$90?

12. Frank's dog is 8 pounds heavier than Lucy's dog. If m represents the weight of Lucy's dog, what is the weight of Frank's dog?

13. Find the slope of a line that passes through the points $(-2, -2)$ and $(6, 2)$.

14. Find the y-intercept and slope of the line represented by $2y - 4x = 10$.

SUMMER 2020 ASSIGNMENT – INCOMING ALGEBRA I

15. Mia correctly answered 12 out of 16 questions on her English test. What percent did she answer correctly?

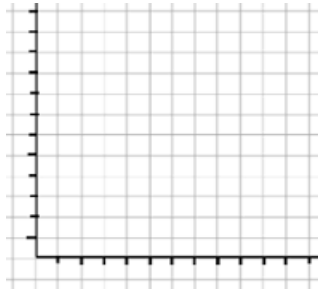
16. Write these numbers in order from least to greatest: 2.03, 2.0, 2.004, 2.0009, 2.1

17. A large pizza costs \$10. Each topping costs an additional \$2. This situation can be represented by the equation $y = 2x + 10$, where x is the number of toppings, and y is the total cost.

a) Make a table of values for this situation:

Number of toppings (x)	1	2	3	4
Total cost (y)				

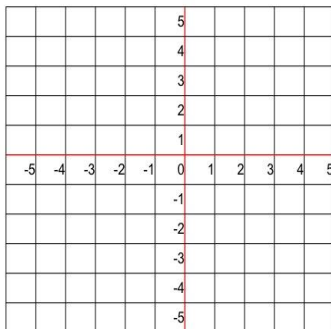
b) Draw a graph to represent the situation.



18. Make a table and graph the solutions of the equation: $y = 2x + 1$

x				
y				

Graphing Data



SUMMER 2020 ASSIGNMENT – INCOMING ALGEBRA I

19. Find the slope of a line that passes through the points (-3, -5) and (1,3)

20. Simplify:

a. $\frac{1}{6} + \frac{2}{3}$

b. $\frac{5}{8} - \frac{1}{4}$

c. $\frac{5}{9} \div \frac{1}{3}$

d. $\frac{2}{5} \times \frac{15}{8}$

21. Nuala drives to her grandma's. She drives at 20 miles per hour. The journey takes 50 minutes. How long would the journey take if Nuala drove at 40 miles per hour?

22. Solve the inequality and graph it on a number line.

$$2s + 5 \leq 49$$

23. Find the circumference and area of a circle having a diameter of 12 inches.

Circumference = _____

Area = _____

SUMMER 2020 ASSIGNMENT – INCOMING ALGEBRA I

24. Solve: $3(x + 2) = -5 - 2(x - 3)$

25. Simplify: $-10(x + 3) + 2(-x - 4) =$

26. Jorge's printer can print 24 pages in 15 minutes. How many pages can it print in
(a) 40 minutes (b) 1 hour?

27. 617 students went on a field trip. Ten buses were filled and 17 students travelled
in cars. How many students were in each bus?

28. Solve: $3(x - 2) + 5x = 4(x + 7)$

29. The sum of 3 consecutive numbers is 54. What is the smallest number?


SUMMER 2020 ASSIGNMENT – INCOMING ALGEBRA I

30. Ava drives from San Jose to Walnut Creek, a distance of 70 miles. She then travels on to Lake Tahoe, which is 140 miles from Walnut Creek. If it takes her 3 hours to complete the trip, what was her average speed for the trip?

31. Which is the best buy? 4 ounces for \$24 OR 2 ounces for \$13

32. The earth travels in an orbit around the sun at 32.5 miles in 2 seconds. At this rate, how many miles around the orbit will the earth travel in 4 minutes?

33. Find the surface area of the right rectangular prism shown in the figure.



Length = 9 m, Width = 7 m, and Height = 5 m.

SUMMER 2020 ASSIGNMENT – INCOMING ALGEBRA I

34. Write 7.8×10^9 in standard notation.

35. What is the Greatest Common Factor (GCF) of 28, 49 and 63?

36. What is the Least Common Multiple (LCM) of 4, 10 and 24?

37. Marilyn leaves home riding her bike at 10 miles per hour and reached her aunt's home in 3 hours. Her brother Matt leaves home sometime later. How long will it take Matt to reach his aunt's home if he rides at 6 miles per hour?

38. One water heater tank A is leaking $\frac{1}{16}$ of a gallon in $\frac{1}{12}$ minute, and Tank B is leaking $\frac{3}{80}$ of a gallon in $\frac{1}{30}$ minute. Which tank is leaking faster?

SUMMER 2020 ASSIGNMENT – INCOMING ALGEBRA I

39. Solve: $16 > -20 + 9d$

40. Solve and graph the inequality: $-9x \leq 18$

